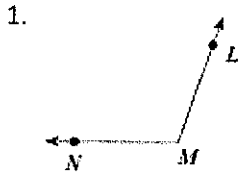


Name _____

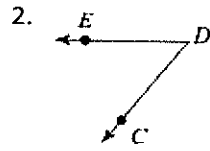
Naming Angles Worksheet

Name the vertex and sides of each angle.



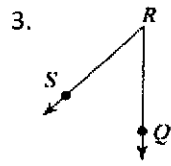
Vertex _____

Sides _____



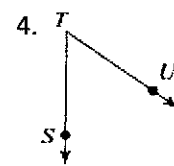
Vertex _____

Sides _____



Vertex _____

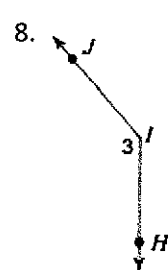
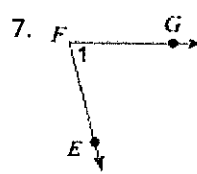
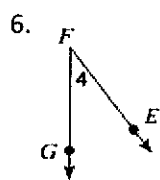
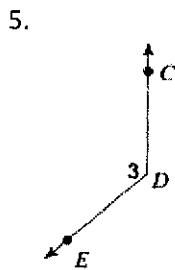
Sides _____



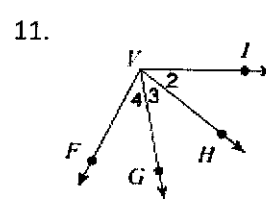
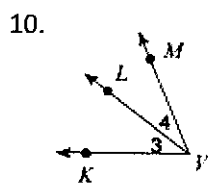
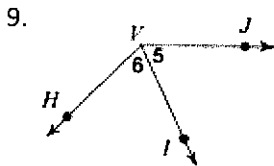
Vertex _____

Sides _____

Name each angle in four ways.



Name all the angles that have V as a vertex.



State if the given point is interior, exterior, or on the angle.

